

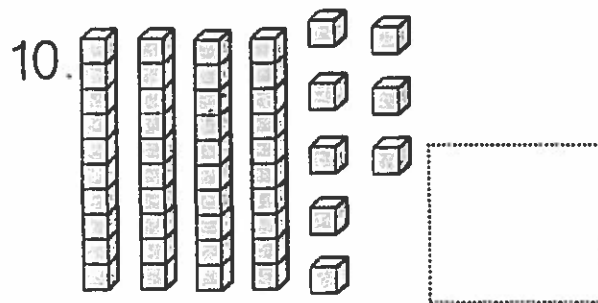
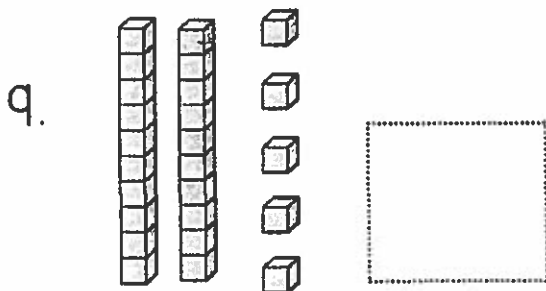
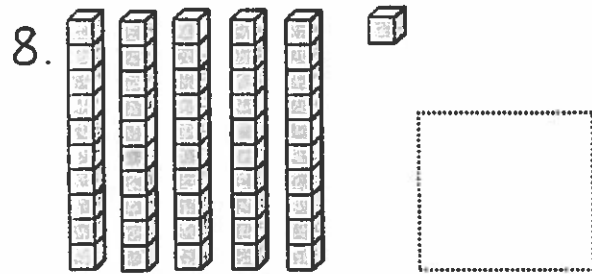
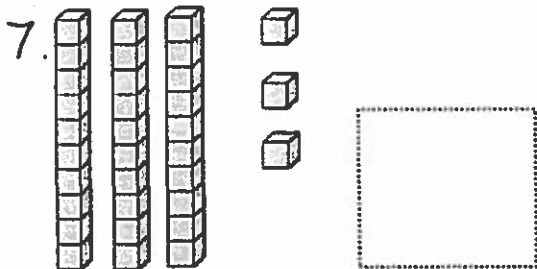
Place Value: Tens & Ones

Name: _____ Date: _____

Directions: Write to tell how many tens and ones.

1. 28 is ___ tens and ___ ones.
2. 34 is ___ tens and ___ ones.
3. 72 is ___ tens and ___ ones.
4. 48 is ___ tens and ___ ones.
5. 33 is ___ tens and ___ ones.
6. 67 is ___ tens and ___ ones.

Directions: Write the number the blocks show.



Place Value: Teen Numbers

Name: _____ Date: _____

Directions: Write to tell how many tens and ones.

1. 17 is ___ ten and ___ ones.
2. 14 is ___ ten and ___ ones.
3. 12 is ___ ten and ___ ones.
4. 18 is ___ ten and ___ ones.
5. 13 is ___ ten and ___ ones.
6. 19 is ___ ten and ___ ones.

Directions: Write the number the blocks show.

